









Qui est l'intrus ?

Pour chaque carte, il faut retrouver le calcul et son résultat.

L'intrus est le nombre restant. Il faudra le noter sur la carte-réponse.










Les fractions

A1

	$\frac{8}{10}$	$\frac{4}{10}$	
$\frac{5}{10}$			$\frac{3}{10}$
	$\frac{1}{10}$		
$\frac{2}{10}$	$\frac{7}{10}$		$\frac{6}{10}$









Les fractions

A2

			$\frac{8}{10}$
	$\frac{6}{10}$	$\frac{7}{10}$	
		$\frac{10}{10}$	$\frac{9}{10}$
$\frac{4}{10}$	$\frac{5}{10}$		









Les fractions

A3

			$\frac{6}{10}$
	$\frac{4}{10}$	$\frac{1}{10}$	
		$\frac{5}{10}$	$\frac{3}{10}$
$\frac{8}{10}$	$\frac{10}{10}$		









Les fractions

A4

	$\frac{4}{10}$	$\frac{7}{10}$	
$\frac{9}{10}$			$\frac{6}{10}$
	$\frac{3}{10}$		
$\frac{5}{10}$	$\frac{2}{10}$		$\frac{8}{10}$










Les fractions

A5

	$\frac{10}{10}$	$\frac{8}{10}$	
$\frac{2}{10}$			$\frac{7}{10}$
	$\frac{9}{10}$		
$\frac{6}{10}$	$\frac{5}{10}$		$\frac{4}{10}$









Les fractions

A6

			$\frac{1}{10}$
	$\frac{5}{10}$	$\frac{7}{10}$	
		$\frac{8}{10}$	$\frac{3}{10}$
$\frac{2}{10}$	$\frac{4}{10}$		








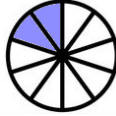

Les fractions

A7

	$\frac{2}{10}$	$\frac{9}{10}$	
$\frac{8}{10}$			$\frac{10}{10}$
	$\frac{4}{10}$		
$\frac{5}{10}$	$\frac{7}{10}$		$\frac{1}{10}$








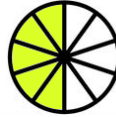

Les fractions

A8

			$\frac{4}{10}$
	$\frac{6}{10}$	$\frac{5}{10}$	
		$\frac{2}{10}$	$\frac{3}{10}$
$\frac{7}{10}$	$\frac{8}{10}$		








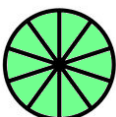
Les fractions

A9

			$\frac{7}{10}$
	$\frac{4}{10}$	$\frac{6}{10}$	
		$\frac{1}{10}$	$\frac{3}{10}$
$\frac{5}{10}$	$\frac{2}{10}$		

Les fractions

A10

	$\frac{6}{10}$	$\frac{9}{10}$	
$\frac{4}{10}$			$\frac{7}{10}$
	$\frac{8}{10}$		
$\frac{5}{10}$	$\frac{2}{10}$		$\frac{10}{10}$

Cartes réponses des élèves

Les fractions

A1	A2	A3	A4	A5
A6	A7	A8	A9	A10

Les fractions

A1	A2	A3	A4	A5
A6	A7	A8	A9	A10

Les fractions

A1	A2	A3	A4	A5
A6	A7	A8	A9	A10

Les fractions

A1	A2	A3	A4	A5
A6	A7	A8	A9	A10